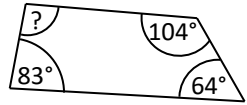
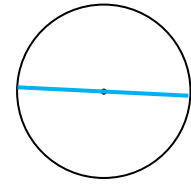
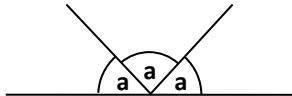
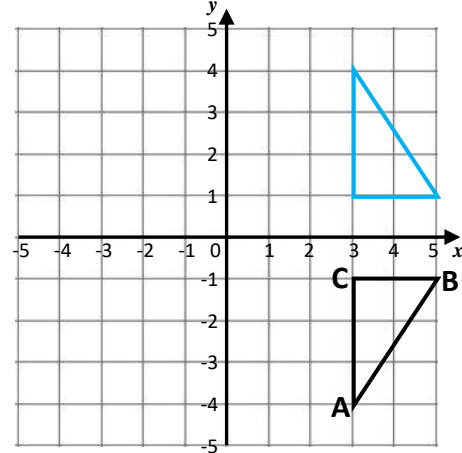
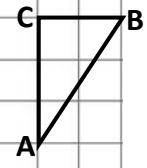
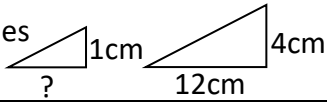


Name: _____

Date: _____

Class/Group: _____

A: Place Value, Add, Subtract, Multiply and Divide		B: Fractions, Ratio, Proportion and Algebra		C: Geometry, Position and Direction	
1. Write in words: 2,134,005	^{6:1} Two million, one hundred and thirty four thousand and five	11. Simplify this fraction fully: $\frac{9}{36}$	^{6:7} $\frac{1}{4}$	21. Find the missing angle. 	^{6:24} 109°
2. What is the value of the 3 in this number? 3,954,682	^{6:1} 3,000,000 (million)	12. $1\frac{5}{6} + \frac{1}{4} =$	^{6:8} $2\frac{1}{12}$	22. On the circle draw a line to label the diameter . 	^{6:25} Line drawn
3. Round 8,523,912 to the nearest ten thousand .	^{6:1} 8,520,000	13. $\frac{2}{8} \div 4 =$	^{6:9} $\frac{1}{16}$	23. Find the value of a . 	^{6:26} 60°
4. The temperature rises from -7°C to 9°C. How many degrees has it risen?	^{6:2} 16°C	14. What is the value of the 8 in this number: 64.381	^{6:10} $\frac{8}{100}$	24. What are the co-ordinates of A ? 	^{6:27} (3, -4)
5. $2,355 \times 16$	^{6:3} 37,680	15. Give your answer as a decimal: $43.5 \div 6$	^{6:11} 7.25	25. Reflect triangle ABC in the x-axis . 	^{6:28} Shape drawn
6. What is the remainder? $3,300 \div 19$	^{6:3} 13	16. Write this fraction as a decimal and a percentage . $\frac{3}{5}$	^{6:12} 0.6, 60%		
7. Write two common factors of both 30 and 45.	^{6:4} 1, 3, 5, 15	17. Find 20% of 180.	^{6:13} 36		
8. There are four prime numbers between 10 and 20. What are they?	^{6:4} 11, 13, 17, 19	18. These shapes are similar . 	^{6:14} 3cm		
9. $85 - 8 \times 7$	^{6:5} 29	19. 1 bag has s sweets. I get 2 bags. Write an expression for no. of sweets.	^{6:15} 2 x s (or 2s)		
10. What is my change if I buy as many £5.98 footballs as I can with £30?	^{6:6} 10p	20. Which two numbers add together to make 25 and have a difference of 1?	^{6:17} 12 and 13		
Total (A)		Total (B)		Total (C)	
Test Total (A+B+C)		R (0-9)		Y (10-19)	
				G (20-25)	