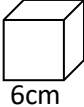
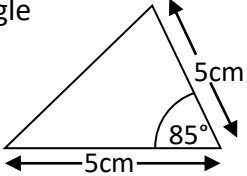

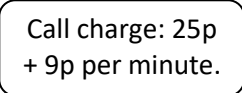
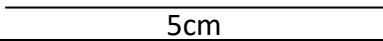


Name: _____

Date: _____

Class/Group: _____

A: Place Value, Add, Subtract, Multiply and Divide		B: Fractions, Ratio, Proportion and Algebra		C: Measure and Geometry	
1. Write five million, seventy one thousand, and eighty four in digits.	6:1	11. Which is the largest fraction? $\frac{1}{2}$, $\frac{3}{8}$ or $\frac{7}{16}$	6:7	21. How many kilometres are approximately equal to 10 miles ?	6:18
2. What is the value of the 5 in this number? 3,954,682	6:1	12. $\frac{2}{3} - \frac{4}{7} =$	6:8	22. Give two possible areas of a rectangle with a perimeter of 10cm.	6:20
3. Round 4.953 to 2 decimal places.	6:1	13. Simplify your answer. $\frac{5}{6} \times \frac{4}{9} =$	6:9	23. Write a formula to show how to find the area of a triangle.	6:21
4. Write the smallest possible crowd. Attendance: 8,200 (to the nearest hundred)	6:2	14. $57,389 \div 1000$	6:10	24. Calculate the volume of a cube with a 6cm side length. 	6:22
5. $4,313 \times 11$	6:3	15. 9.42×4	6:11	25. Draw this triangle accurately below: Use a ruler and a protractor. 	6:23
6. $784 \div 16$	6:3	16. Write this percentage as a fraction and a decimal . 	6:12		
7. Which is a common multiple of 12 and 15? 24 30 60 75 84	6:4	17. Find 40% of 360.	6:13		
8. Which factor of 49 is also a prime number ?	6:4	18. In a class of 35 pupils, $\frac{4}{7}$ are girls. How many boys are there?	6:14		
9. $(12 - 9) \times (9 + 7)$	6:5	19. How much will a 7 minute call cost? 	6:15		
10. I have £10. I buy 2 coffees at £1.73 each. How much do I have left?	6:6	20. What is the 10th term of this sequence? 2, 8, 14, 20, 26, ...	6:16		
Total (A)		Total (B)		Total (C)	
Test Total (A+B+C)		R (0-9)	Y (10-19)	G (20-25)	