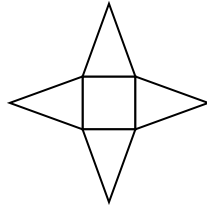
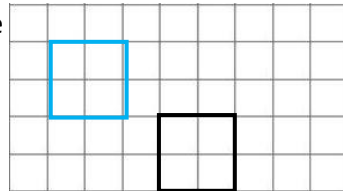



Name: _____

Date: _____

Class/Group: _____

A: Place Value, Add and Subtract		B: Multiply, Divide and Fractions		C: Measure, Geometry and Statistics													
1. Write < or > to make this correct: 384,495 <input type="text"/> 495,837	5:1 <	11. Circle all the factors of 36. 2 3 5 12 15	5:8 2,3,12	21. One glass holds 750 millilitres of lemonade. How much lemonade can 4 glasses hold? Give your answer in litres.	5:23 3 litres												
2. Write 520,102 in words.	5:1 Five hundred and twenty thousand, one hundred and two.	12. How many factors does a prime number have?	5:9 2														
3. Round 247,599 to the nearest ten .	5:2 247,600	13. 3,384 x 11	5:10 37,224	22. What shape is this a net of?	5:24 Square based pyramid												
4. What is the missing number? 1,837 1,847 <input type="text"/> 1,867	5:2 1,857	14. 29,350 ÷ 1000	5:11 29.35(0)														
5. The temperature was -9°C then increased by 17°C. What is it now?	5:3 8°C	15. Circle all of the square numbers . 2 9 12 16 20	5:12 9, 16	23. Translate the shape:	5:28 Shape drawn												
6. What number is represented by these Roman Numerals? CML	5:4 950	16. $\frac{7}{15} - \frac{2}{5} =$	5:13 $\frac{1}{15}$	3 units left and 2 units up.													
7. 28,629 + 13,535 =	5:5 42,164	17. Find an equivalent fraction of $\frac{1}{3}$. 	5:14 $\frac{2}{6}$	24. Look at this bus timetable:	5:30 10:15												
8. 110,250 - 12,890 =	5:5 97,360	18. Write $\frac{14}{4}$ as a mixed number .	5:15 $3\frac{2}{4}$	<table border="1"> <tr> <td>Newfield</td> <td>9:05</td> <td>9:35</td> <td>10:05</td> </tr> <tr> <td>Swanby</td> <td>9:31</td> <td>10:01</td> <td>10:31</td> </tr> <tr> <td>Oldtown</td> <td>9:45</td> <td>10:15</td> <td>10:45</td> </tr> </table>	Newfield	9:05	9:35	10:05	Swanby	9:31	10:01	10:31	Oldtown	9:45	10:15	10:45	
Newfield	9:05	9:35	10:05														
Swanby	9:31	10:01	10:31														
Oldtown	9:45	10:15	10:45														
9. Complete this sum without written working. 20,600 + 5,400 =	5:6 26,000	19. $2\frac{1}{3} \times 6 =$	5:16 14	What time does the 9:35 bus from Newfield stop at Oldtown?													
10. DVDs are £11.35 each. If I buy 2, how much change do I get from £30?	5:7 £7.30	20. Round 9.54 to 1 decimal place.	5:17 9.5	25. I get to the bus stop in Swanby at 10:05. How long do I have to wait until the next bus?	5:30 26 mins												
Total (A)		Total (B)		Total (C)													
Test Total (A+B+C)		R (0-9)	Y (10-19)	G (20-25)													