
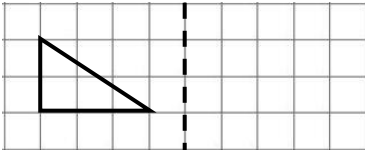

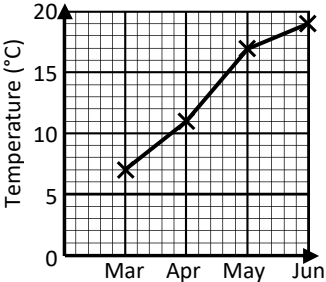


Name: _____

Date: _____

Class/Group: _____

A: Place Value, Add and Subtract		B: Multiply, Divide and Fractions		C: Measure, Geometry and Statistics	
1. What is the value of the 1 in this number? 1,348,567	5:1	11. Write all of the factors of 15.	5:8	21. If 1 inch is approximately 2.5 centimetres, about how many centimetres are there in 6 inches?	5:20
2. Put these in order, smallest first: 82,550 108,275 69,865 212,000	5:1	12. Circle the prime numbers in this list: 1 2 4 6 9 11	5:9		
3. Round 247,599 to the nearest ten thousand .	5:2	13. $1,016 \div 8$	5:10	22. Calculate the area of this rectangle: 3cm  12cm	5:21
4. What is the missing number? 837,400 847,400 <input type="text"/> 867,400	5:2	14. 46.5×100	5:11		
5. Put these in order, smallest first: -11, 8, 0, 3, -5, -9	5:3	15. What is the value of 2^3 ?	5:12	23. Reflect the shape in the mirror line. 	5:28
6. What year is represented by these Roman Numerals? MMXIV	5:4	16. Put these in order, smallest first: $\frac{2}{3}$ $\frac{3}{6}$ $\frac{9}{12}$	5:13		
7. $28,629 - 13,535 =$	5:5	17. Find an equivalent fraction of $\frac{1}{2}$. 	5:14	24. Average temperatures in Spring: Between which two months did the temperature increase the most? 	5:29
8. $110,250 + 12,890 =$	5:5	18. Write the answer as a mixed number . $\frac{4}{7} + \frac{6}{7}$	5:15		
9. Complete this sum without written working. $8,600 + 4,250 =$	5:6	19. $\frac{3}{4} \times 12 =$	5:16		
10. The temp. was -2°C . It rose by 7°C , then dropped by 4°C . What is it now?	5:7	20. Write 0.63 as a fraction.	5:17		
Total (A)		Total (B)		Total (C)	
Test Total (A+B+C)		R (0-9)	Y (10-19)	G (20-25)	